



UNIVERSITY OF CAMBRIDGE INTERNATIONAL EXAMINATIONS  
General Certificate of Education Advanced Subsidiary Level and Advanced Level

---

**GEOGRAPHY****9696/11**

Paper 1 Core Geography

**October/November 2010**

INSERT

**3 hours**

---

**READ THESE INSTRUCTIONS FIRST**

This Insert contains the Table, the Photograph and all the Figures referred to in the questions.

---

This document consists of **8** printed pages.



CANDIDATE  
NAME

--

CENTRE  
NUMBER

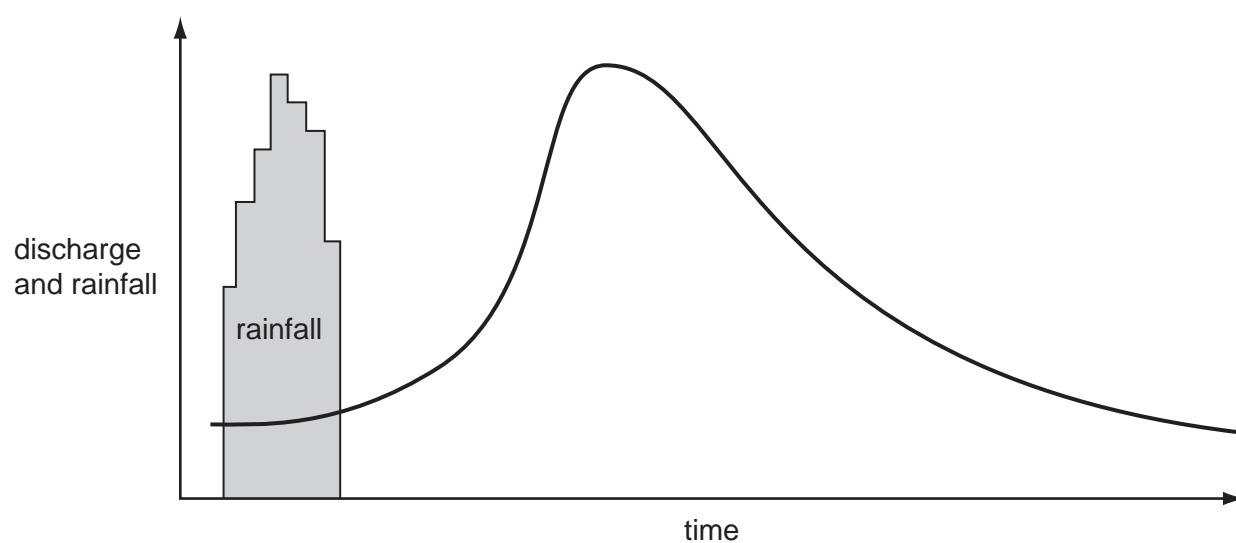
--	--	--	--	--

CANDIDATE  
NUMBER

--	--	--	--

**Fig. 1 for Question 1**

## A storm hydrograph






If you have answered Question 1, attach this page to your Answer Booklet/Paper at the end of the examination.

Fig. 2 for Question 2

## Night time temperatures across a city



## Key

-  built up area
-  6°C isotherms
-  water

**Fig. 3 for Question 3**  
**The global distribution of tectonic plates**

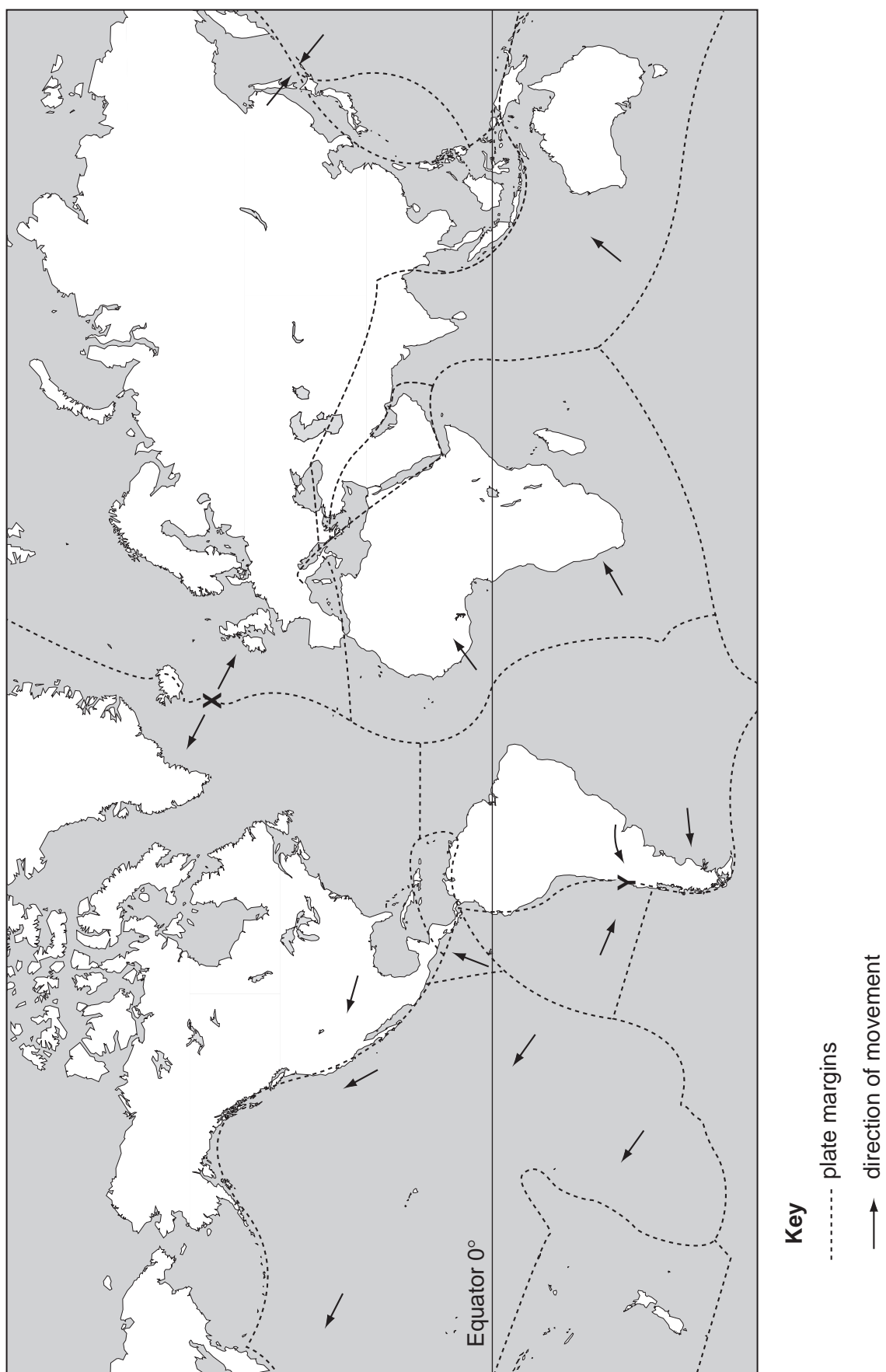


Table 1 for Question 4

Selected population statistics for Mali, an LEDC in Africa, and Italy, an MEDC in Europe, 2005

	<b>Mali (LEDC)</b>	<b>Italy (MEDC)</b>
birth rate (per 1000)	49	8.3
death rate (per 1000)	16	8.5
natural increase rate (per 1000)	<b>N</b>	−0.2
total fertility rate	7.3	1.3
age structure:		
% aged 0–14	47	14
% aged 15–64	50	47
% aged 65 and over	3	39

Fig. 4 for Question 5

## Changes in the urban and rural populations, China, 1950–2030

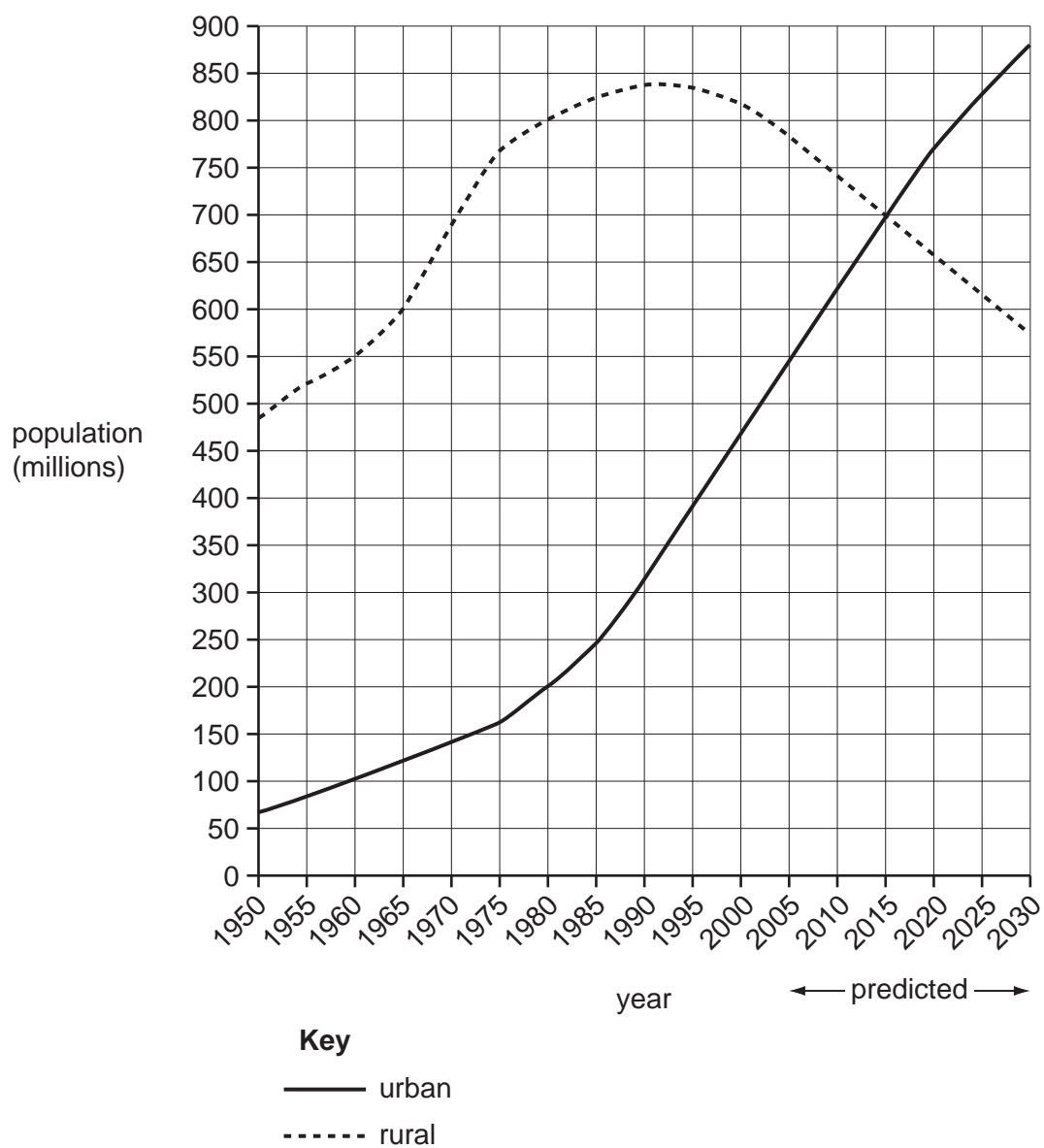
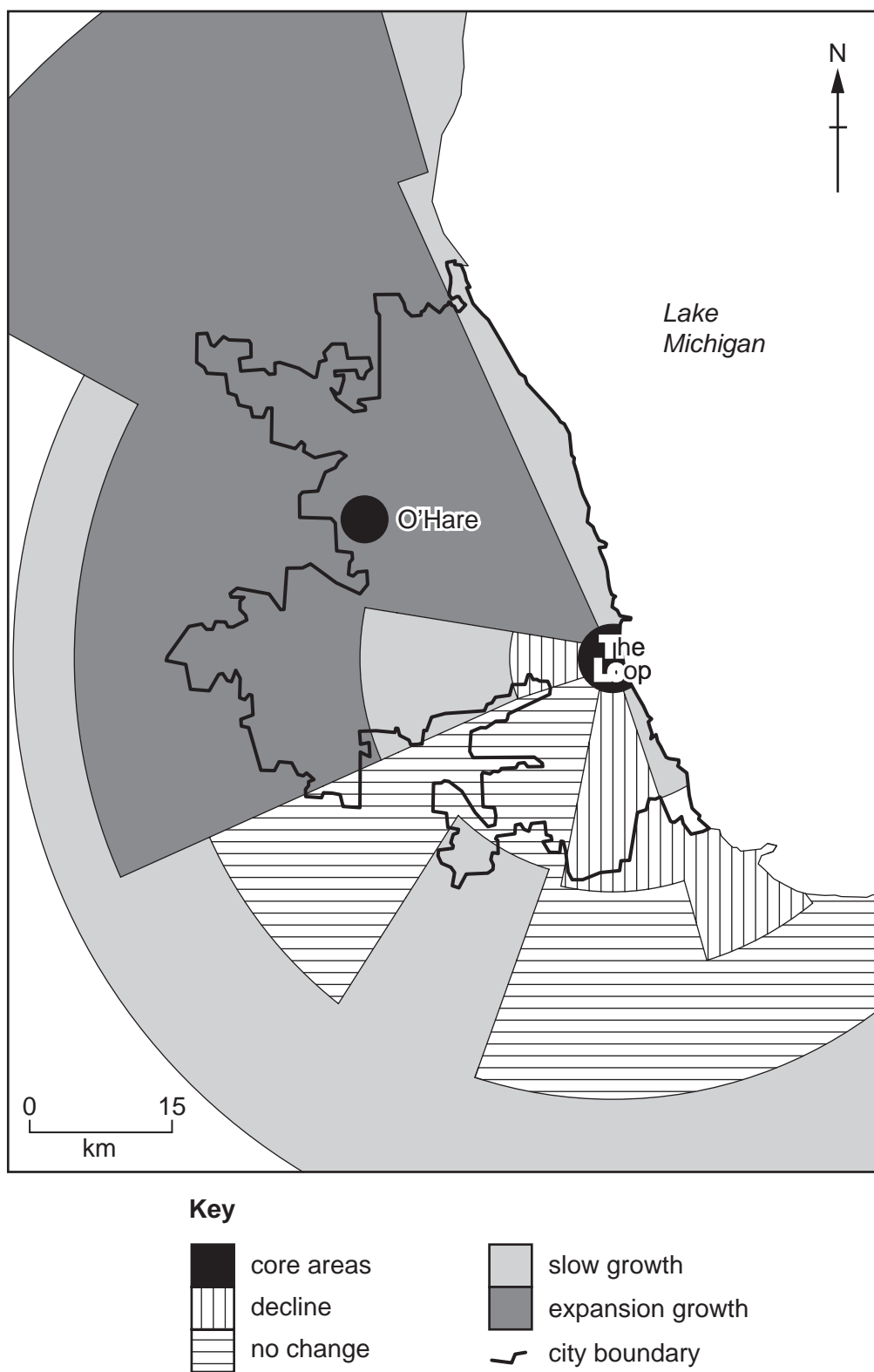


Fig. 5 for Question 6

## Settlement dynamics in Chicago and its region, USA, 2005



**Photograph A for Question 12**

**A shanty town in Manila, Philippines, an LEDC in Asia**



Permission to reproduce items where third-party owned material protected by copyright is included has been sought and cleared where possible. Every reasonable effort has been made by the publisher (UCLES) to trace copyright holders, but if any items requiring clearance have unwittingly been included, the publisher will be pleased to make amends at the earliest possible opportunity.

University of Cambridge International Examinations is part of the Cambridge Assessment Group. Cambridge Assessment is the brand name of University of Cambridge Local Examinations Syndicate (UCLES), which is itself a department of the University of Cambridge.